



# GRADE 2 UNIT 4


## ANSWER



### How many?




1) How many pencils are there?



.....




2) How many sharpeners are there?



.....



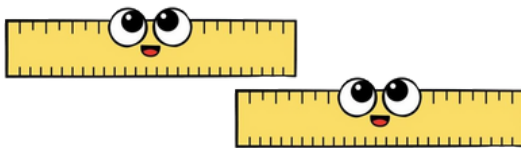
3) How many books are there?



.....



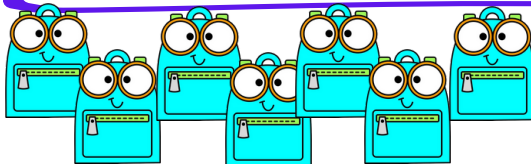
4) How many rulers are there?



.....




5) How many pencils are there?



.....



6) How many erasers are there?



.....